

SECTION A

1. Mention any one basic need of a family.

2. What term is used to mean the plant cover of an area that grows on its own? _____

3. Give one way how a school benefits from the neighbours.

4. Which quality of a map is used to calculate the actual ground distance between places on a map?

5. Draw a map symbol of a hill in the space below.



6. State the main duty of police in Uganda.

7. Which official on local council one (LC I) is in-charge of children's affairs?

8. Name one building material got from swamps.

9. How is a radio important in a home?

10. What causes days and nights?

11. Mention the first animal to be tamed by early man.

12. State any one role of a child in a home.

13. Give one way of caring for lakes and rivers in your community.

14. What is a land locked country?

15. How is a market important in a community?

16. Mention any one way of spending money wisely in your community.

17. Write **NEMA** in full.

18. How is a compass useful to a pilot?

19. Name the largest natural forest in Uganda.

20. Suggest any one method of controlling soil erosion in hilly areas.

21. Why do school going children wear uniforms?

22. Apart from fishing, give any other economic activity carried out in Kalangala district.

23. Name one island district crossed by the equator in Uganda.

24. In which way have people living in mountainous districts tried to solve the problem of transport?

25. Mention any one economic activity carried out on land.

26. Which type of coffee is mainly grown on the slopes of Mt. Elgon.

27. Give one reason why Uganda should co-operate with other countries like Kenya. _____

28. Mention one lake in Uganda that is crossed by the equator.

29. Which physical feature covers the largest part of Uganda?

30. State one importance of the lines of longitude.

31. How can we care for the animal shown below?



32. Give any one cause of road accidents in your district.

33. What is population?

34. Name any one type of leader found in Uganda.

35. How was lake Victoria formed?

For Questions 36-40, answer either Christianity or Islam BUT NOT both on a number.

36. **Either:** Name the holy book for Christians.

Or: Name the holy book for Muslims.

37. **Either:** Which land was promised to Abraham?

Or: Which land was promised to Ibrahim?

38. **Either:** Give one reason why Christians pray?

Or: Give one reason why Muslims pray?

39. **Either:** What day marks the beginning of lent?

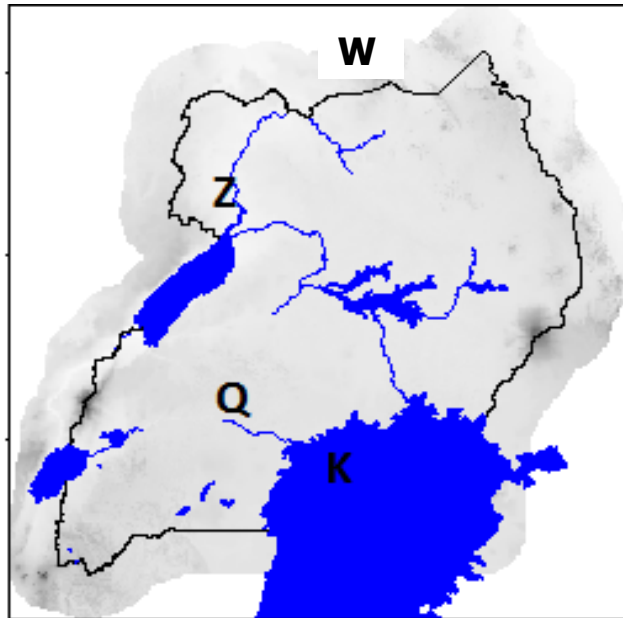
Or: What day marks the end of Ramadhan?

40. **Either:** Name the place where Christians gather to remember the Uganda Martyrs.

Or: Which holy city is visited by Moslems to fulfill Hijja?

SECTION B

41. Study the map below and answer the questions about it carefully.



a) Name the lake marked with letter **M**.

b).How was lake marked **S** formed?

c) What is the direction of country marked with letter **W** from Uganda?

d) Name the mountain marked **T** on the map above.

42.a) What term is used to refer to a water-logged area with vegetation?

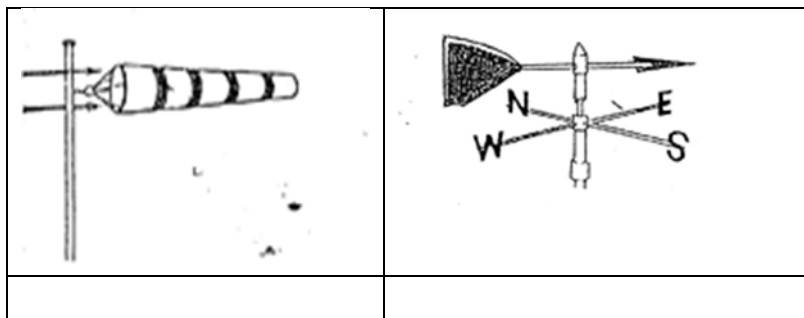
b) Mention any one way how swamps are destroyed in Uganda.

c) State one danger faced by people who live near swamps.

d) Which body is responsible for protecting wetlands in Uganda?

43.a) What is weather?

b) **Name the weather instruments drawn below.**

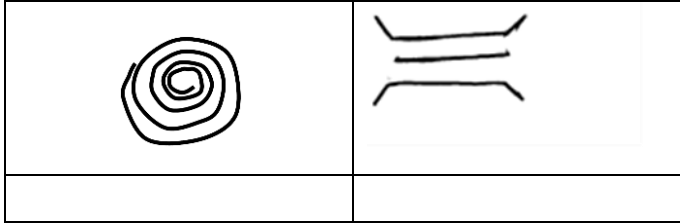


c) Mention any one place where the above weather instruments can be found. _____

44.a) What is a map?

b) Name one element of a good map.

c) **What do the map symbols below represent.**



45.a) What term is used to mean the natural freedoms that every child must have and enjoy?

b) Give any two ways by which children are mistreated in Uganda.

(i) _____

(ii) _____

c) How has the government tried to protect the rights of children in Uganda?

46.a) What are social activities?

b) Mention any two social activities practiced by people in your community.

(i) _____

(ii) _____

c) How are social activities important to people?

47. **Match the following correctly.**

<u>List A</u>	<u>List B</u>
Kyabazinga	Acholi
Emorimor	Bunyoro
Rwot	Busoga
Omukama	Teso

(i) Kyabazinga _____

(ii) Emorimor _____

(iii) Rwot _____

(iv) Omukama _____

48.a) What term is used to mean the movement of people from one place to another for settlement? _____

b) Give two reasons why people of long ago moved from one place to another.

(i) _____

(ii) _____

c) Mention the largest ethnic group in your district.

49.a) Give two factors that attract people to live on slopes of mountains.

(i) _____

(ii) _____

b) List any one problem faced by people living around mountains.

c) Identify the highest peak of mountain Rwenzori.

50.a) What is fishing?

b) Mention two types of fish caught in Uganda.

(i) _____ (ii) _____

c) Give one reason why fishing is not carried out on lake Katwe.

For Questions 51-54, answer Either Christianity Or Islam BUT NOT both.

51.a) **Either:** What is faith?

b) Apart from Noah, mention three other people who had faith in God.

(i) _____

(ii) _____

(iii) _____

Or: a) What is faith?

b) Apart from prophet Isa, mention three other prophets in Islam.

(i) _____

(ii) _____

(iii) _____

52.a) **Either:** What is a parable?

b) Give one reason why Jesus used parables in his teaching.

c) Write down two examples of parables used by Jesus.

(i) _____

(ii) _____

Or: a) What is Zakat?

b) Give any one reason why Muslims pay Zakat.

c) Give two people who should benefit from Zakat.

(i) _____

(ii) _____

53. Either: Match the following books with their writers.

List A

Exodus

John

Proverbs

Matthew

List B

St. Matthew

King Solomon

St. John

Moses

(i) Exodus _____

(ii) John _____

(iii) Proverbs _____

(iv) Matthew _____

Or: Match the following books with the people who receive them.

List A

Zabul

Quran

Tauret

Injir

List B

Muhammad

Musa

Isa

Dauda

(i) Zabul _____

(ii) Quran _____

(iii) Tauret _____

(iv) Injir _____

54.a) **Either:** Why do Christians fast?

b) Which day marks the end of lent period?

c) Mention any two days celebrated during the Holy week.

(i) _____

(ii) _____

Or:a) Explain the meaning of the term Saum?

b) Which day marks the end of Saum.

c) State two groups of people who are excused from fasting during Ramadhan.

(i) _____

(ii) _____

55. FOR BOTH (a) Mention any two qualities of a good leader.

(i) _____

(ii) _____

b) In which way can a leader help his/her people in the community?

c) Identify any one way religious leaders are got in our community.

END